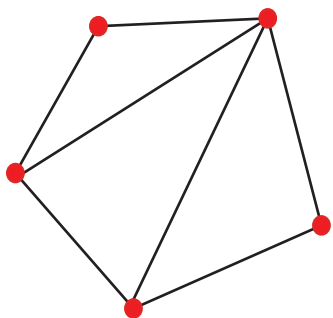
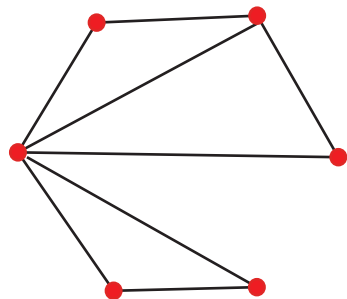


Work out the number of odd and even vertices, then say whether you think they can be traced without lifting your pencil off the paper. Circle 'Yes' or 'No' and then have a try, remembering that you must start on a _____ numbered vertex.



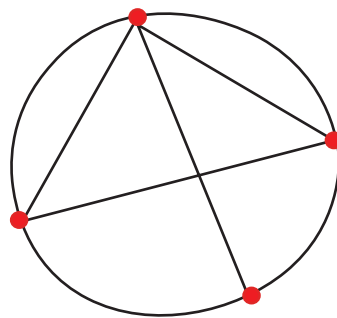
Odd	Even

Yes or No?



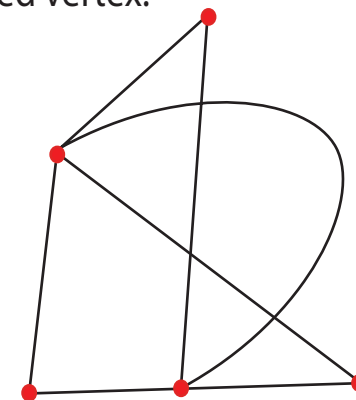
Odd	Even

Yes or No?



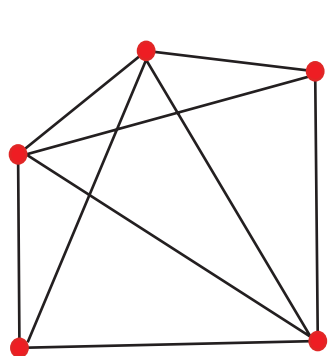
Odd	Even

Yes or No?



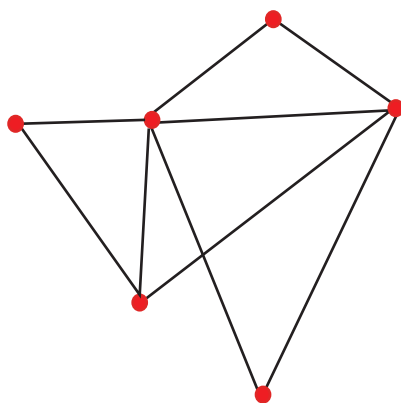
Odd	Even

Yes or No?



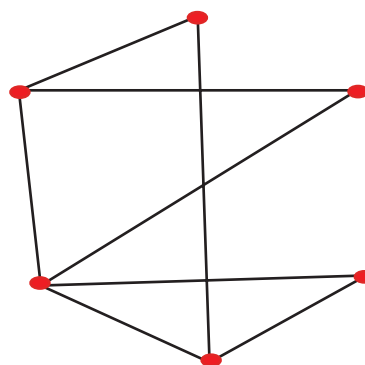
Odd	Even

Yes or No?



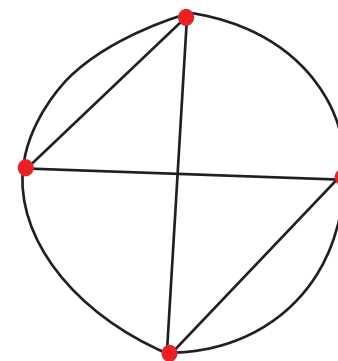
Odd	Even

Yes or No?



Odd	Even

Yes or No?



Odd	Even

Yes or No?

TRACING PATHS